

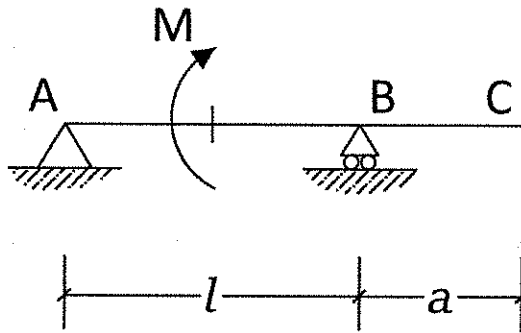


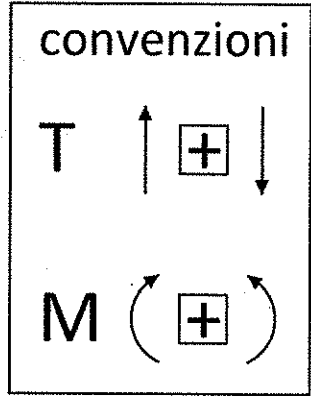
3) Illustrare l'intervento di "miglioramento sismico" ai sensi del DM 17/01/2018, §8.4.2 e della Circolare ministeriale n.7/2019



C - Risolvere la seguente trave indicando reazioni vincolari, diagrammi e deformata.



con $l > a$




Reazioni Vincolari:

$V_a =$

$H_a =$

$V_b =$

Diagramma di Taglio




$T_a =$

$T_b =$

$T_c =$

Diagramma Momento



$M_a =$

$M_b =$

$M_c =$