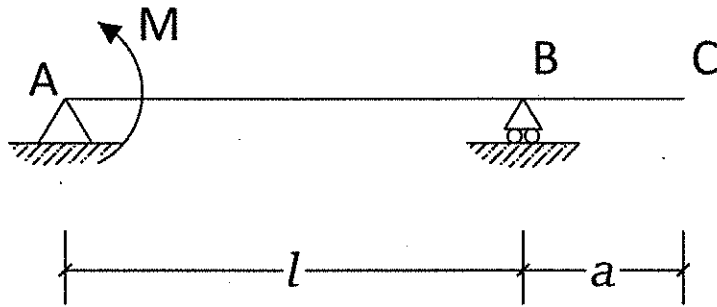








A - Risolvere la seguente trave indicando reazioni vincolari, diagrammi e deformata.



convenzioni

T  $\uparrow$   $\boxed{+}$   $\downarrow$

M  $(\curvearrowright)$   $\boxed{+}$   $(\curvearrowleft)$


Reazioni Vincolari:

$V_a =$

$H_a =$

$V_b =$

Diagramma di Taglio




$T_a =$

$T_b =$

$T_x =$

Diagramma Momento



$M_a =$

$M_b =$

$M_x =$

Deformata (solo qualitativa)

